





AAKAR PUBLIC SCHOOL

Summer
holiday
Homework

Student Name: _____

Class: V

Session: 2026-27



- Summer Vacation is the best and the most fruitful time for learning and nurturing creativity. Keeping this objective in mind we have planned diverse and exciting activities that will enhance your knowledge and boost your creativity.
- "Knowledge is Power". Therefore read lots and lots of books to cultivate the reading habit and develop your vocabulary, language skills, increase your attention span and improve your spellings.
- "A healthy mind lives in a healthy body". So play the sport of your choice INDOORS. It will help to instill discipline, generate sporting spirits and channelize your energies constructively.
- Get up early in the morning and see the rising sun. Do indoor exercises / yoga and stay healthy and fit. Spend quality time with your elders and share your thoughts and ideas with them.
- Eat healthy food and drink lots of water during summer.
- Integrating curriculum helps students deepen their understanding of the subject matter and comprehend relationship between different areas of study. This year's holiday homework has been designed keeping this interdisciplinary aspect in mind.

*NOTE-The school will remain closed from 01.05.2026 to 30.06.2026 and will reopen on 01.07.2026 . Summer holidays homework has been uploaded on our school **App: Edunext and WhatsApp group** Kindly go through it. The marks of holiday homework will be included in your Term-1 exam. Kindly deposit the holiday homework in July 1st week, later it will not be accepted by the class teacher.*

Principal

Dear Parents,

Vacation is a welcome break!

Summer vacation are synonymous with fun, frolic ,getting up late, playing for longer hours and watching fun filled shows on television.

There is a lot more we can do to make these vacations more interesting.

Guidelines to make the summer break more fruitful

- Play games like scrabble, chess, atlas and word building.
- Assign a permanent workplace and a work-time for your child. This encourages discipline.
- Inculcate good manners- 4 magic words 'please, thank you, excuse me, sorry'-use them and see the difference.
- Encourage your child to help around the house work and do small household jobs like dusting, watering the plants, laying dinner table etc.
- Guide the child to keep his room and things clean and well organized.
- Motivate your child to take up yoga or any other form of healthy activity.
- As much as possible, try to converse in English with your child.
- Encourage your child to read books (e books) and children's magazines.
- Integrating curriculum helps students deepen their understanding of the subject matter and comprehend relationship between different areas of study. This year's holiday homework has been designed keeping this interdisciplinary aspect in mind. Being responsible citizens, it becomes our duty to create awareness about environmental issues. The theme is **"THE UNIVERSE-BEYOND PLANETS AND GALAXIES"**.
- Parents are requested to just guide the children to complete the task on their own.

Regards,

Class teacher




Dear Children

- The homework has to be done separately subject wise in note books, beautifully.
- Enjoy the activities given. Do not rush to complete in one go.


ENGLISH

Learn and revise English reader L-1 thoroughly.



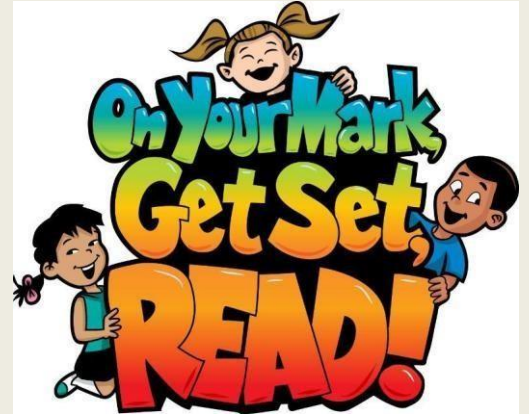
FACE TO FACE

Narrate a story of your choice, make a video of approx. 2 to 3 min. and send it to your English teacher on Whatsapp. Can use props like cutouts/finger puppets. Narrate With proper modulation, the best one's will be uploaded on the school website.



Read the given stories in your free time and do the given assignment (Refer E-Library)

- Story by Ruskin Bond- The Blue Umbrella / Getting Granny's Glasses/ Crazy Times With Uncle Kin.
- Story by Sudha Murthy- How I taught My Grand Mother to read.
- Story by Ranjit Lal- The caterpillar who went on a diet/ Our Nanna was a nut case.
- The Adventures of Sherlock Holmes.



All about my Favourite Character

- Draw your favourite character
- Pick out 15 new words you have come across in your storybook.
- Write the meanings of these words and make one sentence each.
- Choose 10 adjectives and 10 verbs from the story.

FILM REVIEW

Watch a movie of your choice and complete the review below.



Name of the Movie: _____

Your Rating: 

Genre: Comedy/Tragedy/Romance/Action/Adventure/Fantasy/Sci-fi(tick)

Setting of the movie, Place: _____

The main characters of the movie are:

Who is your favourite character and why?

Did you like this movie? Why or Why not?

Fill in the blanks with words at the bottom of the page. Enter in the best possible answer for each collective noun.

1. A _____ of birds

11. A _____ of grapes

2. A _____ of ships

12. A _____ of lions

3. A _____ of cattle

13. A _____ of rice

4. A _____ of wolves

14. A _____ of oysters

5. A _____ of bees

15. A _____ of musicians

6. An _____ of ants

16. A _____ of geese

7. A _____ of hay

17. A _____ of drawers

8. A _____ of fish

18. A _____ of singers

9. A _____ of cards

19. A _____ of mountains

10. A _____ of papers

20. A _____ of trees

army chest range bunch flock fleet band

herd deck forest pack bale bowl swarm

pride bed stack school gaggle choir

Singular and Plural Words Worksheet

Part A – Change the Singular Words into Plural

1. Book → _____
2. Child → _____
3. Mango → _____
4. Toy → _____
5. Baby → _____
6. Foot → _____
7. Mouse → _____
8. Bus → _____
9. Leaf → _____
10. Potato → _____

Part B – Change the Plural Words into Singular

1. Cats → _____
2. Men → _____
3. Dresses → _____
4. Wolves → _____
5. Teeth → _____
6. Stories → _____
7. Boxes → _____
8. Children → _____
9. Ladies → _____
10. Geese → _____

Part C – Fill in the Blanks

1. One apple, many _____.
2. One child, many _____.
3. One tooth, many _____.
4. One leaf, many _____.
5. One woman, many _____.
6. One bus, many _____.
7. One fox, many _____.
8. One baby, many _____.
9. One sheep, many _____.
10. One potato, many _____.

Part D – Choose the Correct Word

1. The (boy/boys) are playing in the park.
2. I have two (pen/pens).
3. The (child/children) are singing.
4. She bought three (dress/dresses).
5. The (mouse/mice) ran away quickly.

SIMPLE PRESENT TENSE

- 1) She _____ (go)
shopping with her
boyfriend.



- 2) My mother _____
- (clean) the house
every morning.



- 3) My brother
swimming every
summer.



- 4) I _____ (like)
drawing pictures.



- 5) She always _____ (play)
the guitar in
her free time:



- 6) She always
_____ (sing)



- 7) He _____
(go) fishing
on Sundays.



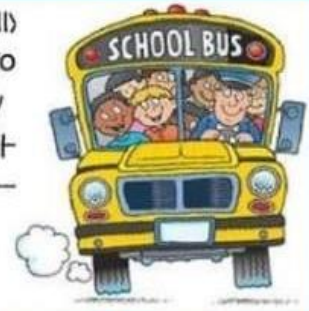
- 8) She _____
(not-know) how
to play the



- 9) They
usually
_____ (have)
picnics
on Sunday.



- 10) He usually
_____ (go)
to school by
school bus. I
never _____
(walk).



- 11) Su and Asli
_____ (do)
their homework
together.



- 12) We always
_____ (go)
to the
theatre on
Mondays.



- 13) She _____
(ride) a bike
after school.



- 14) She _____
(take) her
dog for a
walk in the
mornings.



- 15) My mother always
_____ (drink) coffee
at the same
café.



- 16) She _____
(finish) her
homework
after dinner.



HINDI

1. सौरमंडल क्या है और सौरमंडल में कुल कितने ग्रह हैं | सचित्र वर्णन करें |
2. अनुच्छेद-लेखन :
'अगर सूर्य नहीं होता तो क्या होता '
3. हम अपने दैनिक जीवन में सूर्य की रोशनी का किस-किस प्रकार लाभ उठाते हैं ? कविता के माध्यम से व्यक्त करें |
4. अपने मित्र को पत्र लिखें कि आपको किसी अन्य ग्रह पर रहने का अवसर मिलता तो आप किस ग्रह पर रहना पसंद करते और क्यों ?
5. कक्षा में पढ़ाए सभी पाठों की पुनरावृत्ति करें |

संज्ञा की परिभाषा लिखें और सौरमण्डल से संबंधित समाचार के किसी एक अनुच्छेद लेखन को अपने स्कैप बुक में चिपकाते हुए उस अनुच्छेद से पाँच-पाँच उदाहरण लिखें |



प्रश्न 01 नीचे लिखे वाक्यों को एकवचन से बहुवचन में बदलिए :

उदाहरण :

तोता पेड़ पर बैठा है। → तोते पेड़ पर बैठे हैं।

1. खरबूजा मेज़ पर रखा है। → _____
2. कुत्ता रोटी खा रहा है। → _____
3. दीया जल रहा है। → _____
4. हीरा चमक रहा है। → _____
5. चूहा बिल में घुस रहा है। → _____
6. घोड़ा रथ खींच रहा है। → _____
7. डिब्बा मेज़ पर रखा है। → _____

प्रश्न 02 नीचे लिखे वाक्यों को बहुवचन से एकवचन में बदलिए :

उदाहरण :

लड़कियाँ नाच रही हैं। → लड़की नाच रही है।

1. लड़के खेलते हैं। → _____
2. बालिकाएँ पढ़ती हैं। → _____
3. गाएँ चरती हैं। → _____
4. नदियाँ बहती हैं। → _____
5. बालक सोते हैं। → _____
6. कलियाँ खेल रही हैं। → _____
7. ये नई घड़ियाँ हैं। → _____

हिंदी गृहकार्य

1. कोरोना महामारी पर चर्चा

अपने दो मित्रों से कोरोना महामारी के बारे में चर्चा कीजिए तथा उनके अनुभवों को लिखिए।

2. रचनात्मक कार्य



“मेरे सपनों की धरती” शीर्षक पर एक छोटी-सी कविता, कहानी अथवा चित्र बनाइए।

3. पाठ अभ्यास

हिंदी में पढ़ाए गए सभी पाठों को पढ़िए तथा उनके प्रश्न-उत्तर और अभ्यास कार्य याद कीजिए।

चित्र आधारित लेखन

“दिए गए चित्र को ध्यान से देखिए और चित्र के पीछे छिपी कहानी को समझिए।
फिर उस कहानी को अपने शब्दों में 80-100 शब्दों में अपनी हिंदी कॉपी में लिखिए।”



निम्नलिखित वाक्यांशों को पढ़कर उनके लिए उपयुक्त एक शब्द लिखिए—

क. जो साथ पढ़ता हो

ख. जिसमें सभी गुण हों

ग. जो किसी काम का न हो

घ. जिसे न्याय पसंद हो

ङ. जो पढ़ाते हैं

च. जिसके पास धन हो

छ. जो व्यापार करता है

ज. जो पढ़ा-लिखा न हो

झ. जो भीख माँगता है

ञ. जिसके पास ज्ञान हो

Mathematics

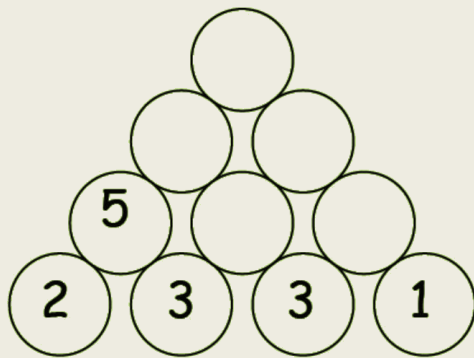
- 1) Learn Tables from 2 to 20
- 2) Practice sums of all exercises of Chapters 1, 2 and 3
- 3) Find out the names of two great Indian Mathematicians and write few lines about them.

Solve these:-

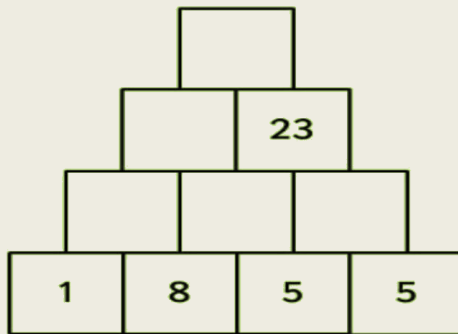
1. The average distance between the Earth and the Venus is 25,724,767 Km. Estimate the given number to the nearest 10, 100 and 1000.
2. The average distance between the Earth and Mars is 48,678,219 Km. Write the successor and predecessor of the given number.
3. Arrange the three above mentioned distance in ascending and descending order.

WALL PUZZLE...

The number in the upper row is the sum of the two numbers just below it. This is called a wall puzzle. Find the answers to the following wall puzzles.



CALCULATION TIME...



Write the numerals in Hindu Arabic and add the numbers across to complete the given table.

Roman Numbers					Sum in Roman Numeral	Sum in Hindu Arabic
IV	IX	VIII	XLVII	XLVIII		
XXXVII	XIX	XX	XXXIV	XXXI		
I				V		
XXXIX	XXXVI	XXV	XXVII	XXII		
	I	I				

Write the numbers in words and expanded form.

4256 Word form : _____

Expanded form: _____

5480 Word form : _____

Expanded form: _____

6093 Word form : _____

Expanded form: _____

6549 Word form : _____

Expanded form: _____

7894 Word form : _____

Expanded form: _____

1235 Word form : _____

Expanded form: _____

5432 Word form : _____

Expanded form: _____

6523 Word form : _____

Expanded form: _____

8634 Word form : _____

Expanded form: _____



10. Write the number before the given number.

	4568
	5248
	5490
	6480
	3215

	8754
	4521
	9805
	6054
	5083

11. Write the number after the given number.

12.

4568	
5248	
5490	
6480	
3215	

9632	
8521	
7432	
9461	
9064	

13. Write the place value of underlined numbers:

<u>9</u>854	
5<u>6</u>48	
63<u>2</u>1	
134<u>5</u>	
2<u>5</u>89	

3. Write the following in standard and expanded form.

Two thousand six hundred ninety nine	Standard form: _____ Expanded form: _____
Three thousand ninety	Standard form: _____ Expanded form: _____
Six thousand ninety two	Standard form: _____ Expanded form: _____
Two thousand sixty three	Standard form: _____ Expanded form: _____
Five thousand three hundred nine	Standard form: _____ Expanded form: _____
Seven thousand two hundred	Standard form: _____ Expanded form: _____
Eight thousand sixty two	Standard form: _____ Expanded form: _____
Nine thousand five hundred sixty two	Standard form: _____ Expanded form: _____
Eight thousand four hundred two	Standard form: _____ Expanded form: _____
Two thousand fifty three.	Standard form: _____ Expanded form: _____
Five thousand three.	Standard form: _____ Expanded form: _____

3. Solve the following:

$$\begin{array}{r} 5789 \\ \times \quad 287 \\ \hline \end{array}$$

$$\begin{array}{r} 7023 \\ \times \quad 312 \\ \hline \end{array}$$

$$\begin{array}{r} 6047 \\ \times \quad 545 \\ \hline \end{array}$$

$$\begin{array}{r} 7281 \\ \times \quad 570 \\ \hline \end{array}$$

$$\begin{array}{r} \hline 5 \overline{)1135} \end{array}$$

$$\begin{array}{r} \hline 6 \overline{)3522} \end{array}$$

Insert commas to separate the periods and enter the numbers on the place value chart.

		TC	C	TL	L	T TH	TH	H	T	O
	52165238		5,	2	1,	6	5,	2	3	8
(a)	53567695									
(b)	1527398									
(c)	760500831									
(d)	9587001									

Write the place value of the underlined digits.

- (a) 90,68,45,030 _____
- (b) 38,04,50,209 _____
- (c) 18,30,05,008 _____
- (d) 42,09,40,295 _____

Write the following numerals using commas in the Indian System.

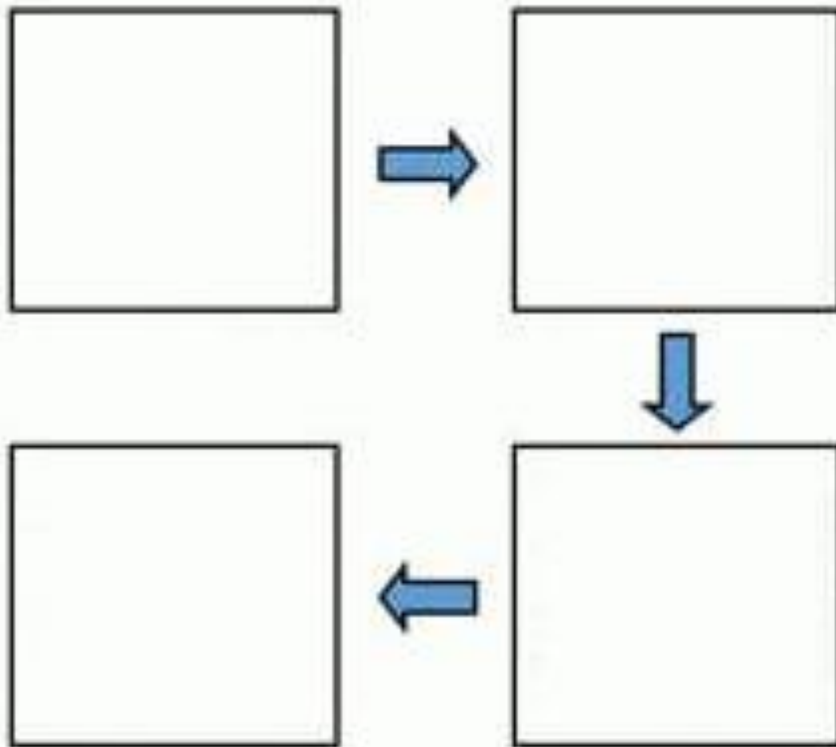
- (a) 862420028 _____
- (b) 453086198 _____
- (c) 830609760 _____
- (d) 676898002 _____

EVS

1. *Revise the chapter-1 and its exercises.*
2. *Solve the worksheets that have been given.*
3. *Make a model of our “solar system”*

Worksheets

Cut and paste the pictures to show the flow of energy in the food chain.



Is the worm a predator or prey? _____





















Food Chains

Name: _____

Grade: _____

Date: _____

Identify what is missing. Cut and paste the missing animals to complete the food chains.

 Sun	→	 Flowers	→		→	 Bird
 Nuts	→	 Sloth	→	 Boa Constrictor	→	
 Sun	→	 Seaweed	→		→	 Dolphin
 Wheat	→	 Rat	→	 Owl	→	
 Sun	→	 Seed	→		→	 Snake

 Rat	 Jaguar	 Hawk	 Butterfly	 Eel
--	---	---	---	--

INDIA STATES AND UNION TERRITORIES

DRAG THE BOXES ON APPROPRIATE DOTS REPRESENTING CORRESPONDING STATES



MAHARASHTRA



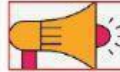
CHATTISGARH



ORISSA



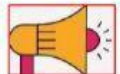
JHARKHAND



ANDRA
PRADESH



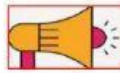
TELANGANA



TAMILNADU



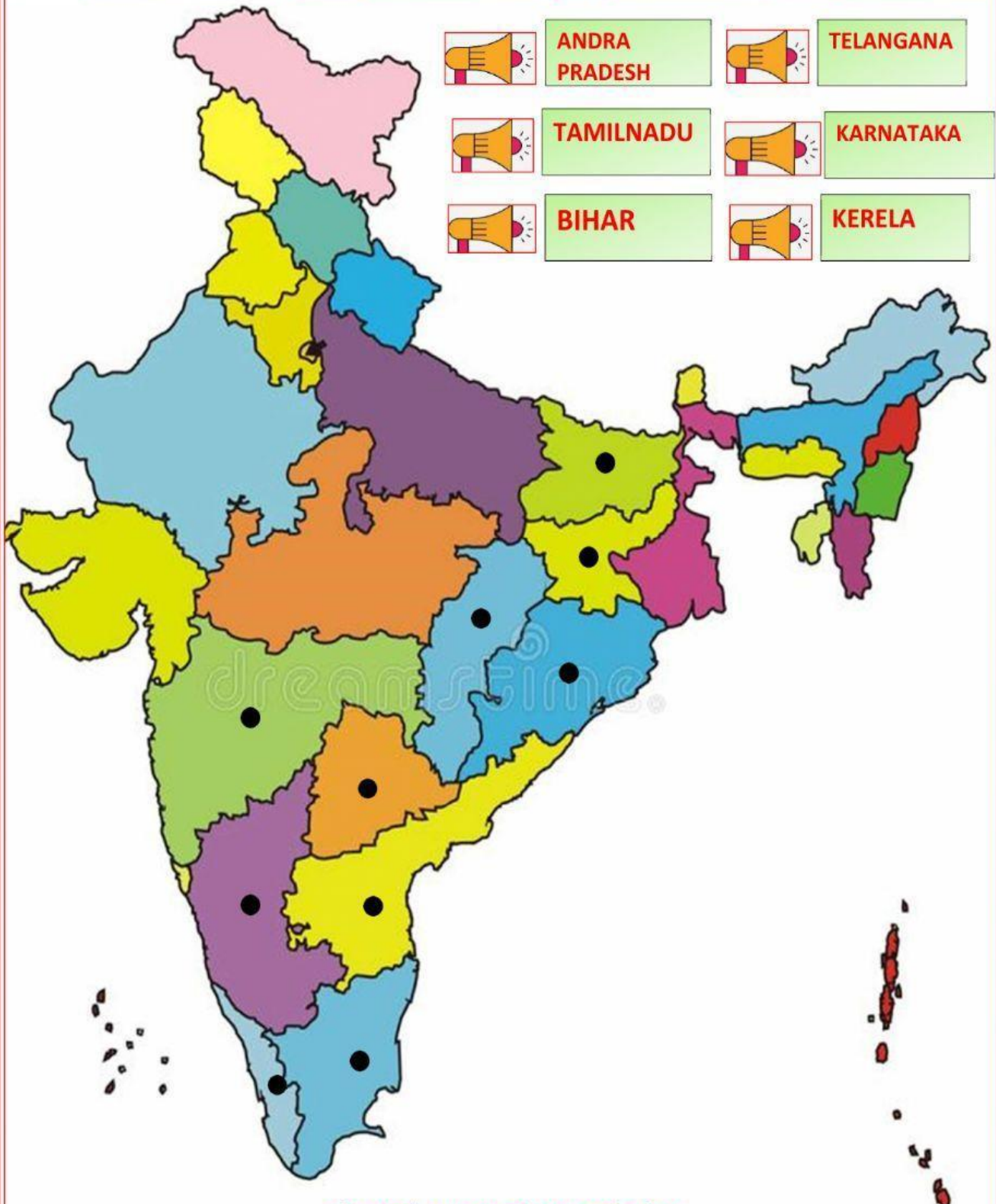
KARNATAKA



BIHAR



KERELA



ANITA SRIVASTAVA

C. S SARAY GULAHRIA, CHARGAWAN, GORAKHPUR

Worksheet: Solar System

Tick ✓ the correct option

1. Which is the center of our solar system?

- a) Earth
- b) Moon
- c) Sun
- d) Mars

2. How many planets are there in our solar system?

- a) 7
- b) 8
- c) 9
- d) 10

3. Which planet is known as the “Blue Planet”?

- a) Mars
- b) Venus
- c) Earth
- d) Neptune

4. The smallest planet in the solar system is:

- a) Mars
- b) Mercury
- c) Pluto
- d) Venus

5. Which planet is called the “Red Planet”?

- a) Jupiter
- b) Saturn
- c) Mars
- d) Uranus

6. What causes day and night on Earth?

- a) Revolution of Earth
- b) Rotation of Earth
- c) Movement of Moon
- d) Sun’s movement

7. Which planet has the most moons?

- a) Jupiter
- b) Saturn
- c) Earth
- d) Mars

8. The asteroid belt lies between which two planets?

- a) Earth and Mars
- b) Mars and Jupiter
- c) Jupiter and Saturn
- d) Venus and Earth

9. Which of these is NOT a planet?

- a) Neptune
- b) Pluto
- c) Sun
- d) Venus

10. One year on Earth means:

- a) One rotation of Earth
- b) One revolution of Earth around the Sun
- c) One revolution of Moon around Earth
- d) 24 hours

COMPUTER WORKSHEET

I. Choose the correct answer:

1. _____ is a rectangular storage device generally used in mobile phones, tablets and digital cameras.
a) pen drive b) hard disk c) memory card d) none of these
2. A computer is a machine that works in _____ cycle.
a) IPO b) IOP c) OPI d) none of these
3. The motherboard is present inside the _____ box.
a) CPU b) CRT c) UPS d) none of these
4. Which of the following is an input device?
a) Touch screen b) keyboard c) mouse d) all of these
5. The information stored in a computer is in the form of _____ digits.
a) Binary b) decimal c) octal d) all of these
6. Hard disk is a _____ device.
a) input b) output c) processing d) none of these
7. You can draw images directly on the computer screen using a _____.
a) mouse b) track ball c) light pen d) none of these
8. The _____ unit of CPU controls all the activities and devices of the computer.
a) control b) arithmetic and logical c) memory d) none of these
9. A _____ shows all the work that we do on the computer.
a) keyboard b) mouse c) CPU d) none of these
10. A keyboard is an _____ device.
a) input b) output c) process d) information

II. Put a tick (✓) for the correct statements and a cross (X) for the wrong ones:

11. A mouse without a wire is called a wired mouse. _____
12. A headphone is used by an individual to listen to music or sound from the computer without letting others hear. _____
13. ROM is also called temporary memory. _____
14. The CPU acts like the brain of a computer. _____
15. There are five processing devices in a computer. _____
16. Primary memory is the auxiliary memory of the computer. _____
17. Projector is an input device. _____
18. A headphone with a microphone attached to it is also called a headphone. _____
19. The keyboard has many buttons on it called keys. _____
20. LCD and LED monitors consume less power than CRT monitors. _____

III. Read the description and match with the correct device:

21.



- i. It is generally used for showing presentations.
- ii. It is the main storage device of a computer that comes fixed inside the CPU box.

22.



23.



- iii. It is used to capture live images and videos.
- iv. It works like a photocopy machine.

24.



25.



- v. It is used to take printout of what appears on the computer screen.
- vi. It is used to hear music and other sounds played on the computer.

26.



27.



- vii. It is a portable device small enough to fit into your pocket.
- viii. It is used to play games on the computer.

28.



Music

Have to prepare this song and record the video and send it to the class teacher.

- Mahamrityunjay Mantra
- Song - Teri Hai Zameen Tera Aasman

DANCE

Have to prepare dance on this song and record the video and send it to the class teacher.

- Saraswati Vandana - Varde Varde Veena Vadhni Varde

Art & Craft

Project: - Make a Newspaper Flower.

Dear students please collect the newspaper materials of your house and make something interesting with it. It can be useful item or it can be decorative item also. Materials which you can use newspaper, glue etc. Be very careful about your hygiene.



Some Every Day Tasks:

- Clean your room and keep it neat and tidy.
- Help mom in the kitchen.
- Lay the table
- Walk, jog, exercise and keep fit.
- Be creative do some drawing and painting.

happy
holidays!

Holiday Homework Marks Distribution

S.No.	Subject Name	Maximum Marks	Obtained Marks	Teacher's Signature
1	English	5		
2	Hindi	5		
3	Mathematics	5		
4	EVS	5		
5	Computer	5		

Note:

The Holiday Homework of each subject carries ****5 marks****, which will be included in the ****Term-1 Internal Assessment (IA)**** category. Students are advised to complete their work neatly and submit it on time.